

शिव  सेना

उद्धव बाळासाहेब ठाकरे

MHT - CET (LLB) MOCK

(Legal Aptitude and Legal Reasoning, General Knowledge and Current affairs,
Logical and Analytical Reasoning, English and Basic Mathematics)



Answer key and solutions will be available on (<https://yuvasenacet.com>)



Scan me

MHT - CET (LLB) MOCK TEST - 2025 QUESTION BOOKLET

**Subjects: Legal Aptitude and Legal Reasoning, General Knowledge and Current affairs,
Logical and Analytical Reasoning, English and Basic Mathematics**

Test Booklet Code
A

Roll No.						

Test Booklet No.			
1	2	3	4
(Write this number on your Answer Sheet)			

Duration : 2 Hours

Total Marks: 120

Candidate's Signature

Invigilator's Signature

Instructions to Candidates

1. This Question Booklet contains 120 Objective Type Questions (Single Best Response Type) in the subjects of Legal Aptitude and Legal Reasoning (32), General Knowledge and Current affairs (24), Logical and Analytical Reasoning (32), English (24) and Basic Mathematics (8).
2. The Question Booklet and Answer Sheets are issued to examinees separately at the beginning of the examination session.
3. Choice and sequence for attempting questions will be as per the convenience of the candidate.
4. Candidate should carefully read the instructions printed on the Question Booklet and Answer Sheet and make the correct entries on the Answer Sheet. Special care should be taken to fill Question Booklet No. and Roll No. accurately. The correctness of entries has to be cross-checked by the invigilators. **The candidate must sign on the Answer Sheet and Question Booklet.**
5. Read each question carefully.
6. Determine the correct answer from out of the four available options given for each question.
7. Fill the appropriate circle completely like this ●, for answering the particular question, with Black/Blue ball point pen only, in the Answer Sheet.
8. Each answer with correct response shall be awarded **one (1) mark**. There is **no Negative Marking**.
9. Use of whitener or any other material to erase/hide the circle once filled is not permitted. Avoid overwriting and/or striking of answers once marked.
10. The candidates should ensure that the Answer Sheet is not folded. Do not make any stray marks on the Answer Sheet. Do not write your Roll No. anywhere else except in the specified space in the Question Booklet/ Answer Sheet.
11. **Rough work should not be done on the Answer Sheet.**
12. Use of Electronic/Manual Calculator is prohibited.
13. No candidate is allowed to leave the examination hall till the examination session is over.

[Note: MHT-CET 2025 examination will be conducted Online (Computer Based Test) and the instructions may vary accordingly.]

Legal Aptitude and Legal Reasoning

- What does “CBI” stand for in the Indian legal system?
(A) Central Bureau of Intelligence (B) Central Board of Investigation
(C) Central Bureau of Investigation (D) Crime Branch of India
- Principle:** A contract induced by fraud is voidable at the option of the defrauded party.
Facts: Vikram sells a diamond to Sanjay, claiming it is genuine, but it is actually synthetic. Sanjay discovers this later. What can Sanjay do?
(A) Nothing, as the sale is finalized (B) Sue Vikram for damages only
(C) Rescind the contract and claim restitution (D) Keep the diamond since he paid for it
- Principle:** The legal maxim *Ubi jus ibi remedium* means “where there is a right, there is a remedy.”
Facts: Anita’s neighbor blocks her sunlight, violating her right to light. Can Anita seek a remedy?
(A) No, because it is natural (B) Yes, because her right is infringed
(C) No, unless she owns the sunlight (D) Yes, only if the wall is illegal
- Under which article can the Governor of a state grant pardons?
(A) Article 161 (B) Article 72 (C) Article 356 (D) Article 19
- Principle:** Nuisance is an unlawful interference with a person’s use or enjoyment of land.
Facts: Anil runs a factory that emits continuous smoke, affecting Priya’s ability to breathe comfortably in her nearby home. Is Anil liable for nuisance?
(A) No, because factories are permitted to operate (B) Yes, because it disrupts Priya’s enjoyment
(C) No, unless Priya complained earlier (D) Yes, only if Priya takes legal action
- What is the term for assisting or encouraging someone to commit a crime?
(A) Abetment (B) Conspiracy (C) Accomplice (D) Collusion
- Principle:** A person is not liable for an offence if they lack the intention or knowledge of wrongdoing.
Facts: Neha, a vendor, sells a faulty appliance to Mohan, unaware of its defect. The appliance injures Mohan. Is Neha criminally liable?
(A) Yes, because she sold the appliance (B) No, because she did not know of the defect
(C) Yes, because Mohan was injured (D) No, because Mohan should have checked it
- The Right to Information Act in India was enacted in which year?
(A) 2000 (B) 2005 (C) 2010 (D) 2015

9. **Principle:** A contract with a minor is void *ab initio*.
Facts: Arjun, aged 15, agrees to buy a scooter from Deepak. Deepak delivers it, but Arjun refuses to pay. Can Deepak enforce the contract?
(A) Yes, because the scooter was delivered (B) No, because Arjun is a minor
(C) Yes, if Arjun's parents consent (D) No, unless Arjun turns 18
10. **Assertion (A):** Freedom of religion is a fundamental right in India.
Reason (R): It is guaranteed under Article 25 of the Constitution.
(A) Both (A) and (R) are true and (R) is the correct explanation of (A)
(B) Both (A) and (R) are true but (R) is NOT the correct explanation of (A)
(C) (A) is true but (R) is false
(D) (A) is false but (R) is true
11. What is the primary objective of the Arbitration and Conciliation Act, 1996 in India?
(A) To punish parties in disputes (B) To provide a faster alternative to litigation
(C) To enforce criminal penalties (D) To regulate property transactions
12. **Principle:** Ignorance of law is no excuse, but ignorance of fact may be.
Facts: Sameer drives at 90 kmph in a 50 kmph zone, unaware of the speed limit sign. Is Sameer liable?
(A) No, because he was unaware of the limit
(B) Yes, because ignorance of law is no excuse
(C) No, if he proves he did not see the sign
(D) Yes, only if he caused an accident
13. What is the minimum age for a person to be eligible to become the President of India?
(A) 25 years (B) 30 years (C) 35 years (D) 40 years
14. **Principle:** Whoever attempts to commit an offence and does an act towards its commission is liable for attempt.
Facts: Tarun prepares poison to kill Ravi but is arrested before administering it. What offence has Tarun committed?
(A) No offence, as no poison was used (B) Attempt to murder
(C) Possession of poison (D) Threatening behaviour
15. Gautam rents his warehouse to Naveen for smuggling counterfeit goods, knowing the purpose. Naveen fails to pay rent. Can Gautam sue for the rent?
(A) Yes, because a contract was made (B) No, because the purpose was illegal
(C) Yes, if Gautam was unaware of the purpose (D) No, because rent disputes are not actionable

16. What is the term for an unlawful act causing injury to another person's body?
(A) Battery (B) Libel (C) Nuisance (D) Fraud
17. **Assertion (A):** The Consumer Protection Act protects buyers from defective goods.
Reason (R): It allows consumers to seek redressal through consumer forums.
(A) Both (A) and (R) are true and (R) is the correct explanation of (A)
(B) Both (A) and (R) are true but (R) is NOT the correct explanation of (A)
(C) (A) is true but (R) is false
(D) (A) is false but (R) is true
18. **Principle:** A contract based on a mutual mistake of fact is void.
Facts: Kiran sells a horse to Manish, both believing it to be healthy, but it was sick at the time of sale. Is the contract valid?
(A) Yes, because the sale was completed (B) No, because of a mutual mistake of fact
(C) Yes, if Manish accepts the horse (D) No, because Kiran misled Manish
19. Who appoints the Chief Justice of India?
(A) Prime Minister (B) President
(C) Parliament (D) Supreme Court Collegium
20. **Principle:** A person acting in self-defense is not liable for harm caused to the aggressor.
Facts: Jaya, attacked by Sunil with a rod, strikes Sunil with a stone to protect herself, injuring him. Is Jaya liable?
(A) Yes, because she injured Sunil (B) No, because she acted in self-defense
(C) Yes, if Sunil dies (D) No, unless Jaya used excessive force
21. The Juvenile Justice Act primarily deals with:
(A) Crimes committed by adults (B) Children in conflict with the law
(C) Property disputes (D) Consumer rights
22. A person commits a theft in India and then flees to the United States. Can India request the person's extradition to face trial?
(A) Yes, if there is an extradition treaty between India and the United States
(B) No, because the crime was not committed in the United States
(C) Yes, because theft is a crime in every country
(D) No, because India has no authority outside its borders

23. Priya designs a unique logo. Rohan copies it without permission for his brand. What can Priya do?
- (A) Sue Rohan for copyright infringement
(B) Nothing, as logos can't be protected
(C) File a theft case
(D) Sue for defamation
24. **Principle:** A contract to do an act that becomes impossible after the contract is made is void.
Facts: Meena agrees to transport goods for Nitin via a truck, but the truck is destroyed in a fire before delivery.
What is the status of the contract?
- (A) Valid, as Meena must find another truck
(B) Void, as the act became impossible
(C) Valid, because fires are unpredictable
(D) Voidable, at Nitin's option
25. Amit issues a cheque to Bina for ₹ 10,000, but it bounces due to insufficient funds. What can Bina do under the Negotiable Instruments Act, 1881?
- (A) File a theft case
(B) Sue Amit for breach of contract only
(C) Initiate a criminal case for cheque dishonor
(D) Nothing, as cheques are not enforceable
26. What is the term for a written defamation?
- (A) Slander (B) Libel (C) Assault (D) Battery
27. **Principle:** An agreement without consideration is void unless it falls under specific exceptions.
Facts: Preeti promises to donate her old furniture to Kunal out of goodwill, but later refuses. Can Kunal enforce this promise?
- (A) Yes, because it was made out of goodwill
(B) No, because there was no consideration involved
(C) Yes, because furniture has value
(D) No, because donations are not enforceable
28. **Principle:** Trespass to land occurs when someone intentionally enters another's property without permission.
Facts: Suresh walks into Ritu's garden to take photographs without her consent. Is Suresh liable for trespass?
- (A) No, because he did not cause damage
(B) Yes, because he entered without permission
(C) No, because photographs are not property
(D) Yes, only if Ritu files a complaint

29. What does “*actus reus*” refer to in criminal law?
(A) The guilty mind (B) The physical act of a crime
(C) The punishment for an offence (D) The intention to appeal
30. **Principle:** The principle of natural justice requires that no one should be a judge in their own cause (*Nemo judex in causa sua*).
Facts: A principal investigates a complaint against herself and suspends a student. Is this decision valid?
(A) Yes, because she is the authority (B) No, because she is biased
(C) Yes, if the student agrees (D) No, unless the complaint is false
31. **Principle:** Whoever dishonestly takes movable property out of another’s possession without consent commits theft.
Facts: Vinod borrows Lakshmi’s phone with permission but later sells it without her approval. Has Vinod committed theft?
(A) No, because he borrowed it initially (B) Yes, because he dishonestly sold it
(C) No, unless Lakshmi reports it (D) Yes, only if the sale was permanent
32. **Assertion (A):** The Indian Constitution allows preventive detention.
Reason (R): It is permitted under Article 22 with certain safeguards.
(A) Both (A) and (R) are true and (R) is the correct explanation of (A)
(B) Both (A) and (R) are true but (R) is NOT the correct explanation of (A)
(C) (A) is true but (R) is false
(D) (A) is false but (R) is true

General Knowledge and Current affairs

33. Which Indian state has the longest coastline?
(A) Tamil Nadu (B) Andhra Pradesh (C) Gujarat (D) Maharashtra
34. Which classical dance form originates from Tamil Nadu?
(A) Kathak (B) Bharatanatyam (C) Odissi (D) Kuchipudi
35. Who wrote the famous book “The Discovery of India”?
(A) Mahatma Gandhi (B) Rabindranath Tagore
(C) Jawaharlal Nehru (D) Dr. B.R. Ambedkar
36. Which element is commonly known as “Quicksilver”?
(A) Mercury (B) Silver (C) Sodium (D) Potassium

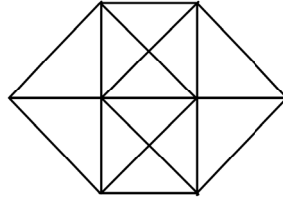
37. Who was appointed as the Chief Justice of India in November 2024?
(A) Justice D.Y. Chandrachud (B) Justice Sanjiv Khanna
(C) Justice U.U. Lalit (D) Justice N.V. Ramana
38. The Dandi Salt March, led by Mahatma Gandhi, took place in which year?
(A) 1925 (B) 1930 (C) 1935 (D) 1940
39. Which Indian cricketer became the fastest to score 27,000 international runs in 2024?
(A) Virat Kohli (B) Rohit Sharma (C) Sachin Tendulkar (D) M.S. Dhoni
40. Which Indian festival is known as the “Festival of Lights”?
(A) Holi (B) Diwali (C) Dussehra (D) Pongal
41. Who was the first Indian woman to become the President of the Indian National Congress?
(A) Sarojini Naidu (B) Indira Gandhi
(C) Vijaya Lakshmi Pandit (D) Sucheta Kripalani
42. Who was the first Indian to win the Nobel Prize in Economics?
(A) Amartya Sen (B) Abhijit Banerjee
(C) C.V. Raman (D) Jagdish Bhagwati
43. Which gas is primarily responsible for the greenhouse effect on Earth?
(A) Nitrogen (B) Oxygen (C) Carbon Dioxide (D) Argon
44. Which Indian city is known as the “Silicon Valley of India”?
(A) Hyderabad (B) Bengaluru (C) Pune (D) Chennai
45. The Sundarbans, famous for the Royal Bengal Tiger, is located in which state?
(A) Odisha (B) West Bengal (C) Assam (D) Andhra Pradesh
46. What is the name of the solar mission launched by ISRO in September 2023?
(A) Aditya-L1 (B) Surya-1 (C) Solar Orbiter (D) Helios-2
47. Who was the first Governor-General of independent India?
(A) Lord Mountbatten (B) Freeman-Thomas
(C) Dr. Rajendra Prasad (D) Sardar Vallabhbhai Patel
48. In December 2024, which Indian city hosted the Global FinTech Festival?
(A) Mumbai (B) Bengaluru (C) Hyderabad (D) Delhi
49. Which river is known as the “Ganga of the South”?
(A) Godavari (B) Krishna (C) Kaveri (D) Mahanadi
50. In 2023, which state became the first in India to implement the Uniform Civil Code (UCC)?
(A) Uttarakhand (B) Gujarat (C) Maharashtra (D) Himachal Pradesh

51. In January 2025, which country did India sign a Free Trade Agreement (FTA) with to boost economic ties?
(A) United Kingdom (B) Australia (C) Japan (D) Canada
52. In February 2025, which Indian state launched the 'One Family, One Identity' scheme to provide a single family ID?
(A) Uttar Pradesh (B) Maharashtra (C) Rajasthan (D) Madhya Pradesh
53. The Quit India Movement was launched by Mahatma Gandhi in which year?
(A) 1939 (B) 1940 (C) 1942 (D) 1947
54. Which Indian athlete won a bronze medal in the women's 10m air pistol event at the Paris Olympics 2024?
(A) Manu Bhaker (B) Elavenil Valarivan (C) Apurvi Chandela (D) Anjum Moudgil
55. In October 2024, which Indian dance form was showcased at the International Dance Festival in Paris?
(A) Kathakali (B) Odissi (C) Kuchipudi (D) Manipuri
56. In November 2024, which city hosted the Global Renewable Energy Investors Meet (RE-INVEST) 2024?
(A) Ahmedabad (B) Gandhinagar (C) Hyderabad (D) Chennai

Logical and Analytical Reasoning

57. Study the following statement and conclusions and decide which conclusion is logical.
Statement: The Government owned company had asked its employees to declare their income and assets but it has been strongly resisted by employees union and no employee is going to declare his income.
Conclusions:
I. The employees of this company do not seem to have any additional undisclosed income besides their salary.
II. The employees union wants all senior officers to declare their income first.
(A) Only Conclusion I follows (B) Only Conclusion II follows
(C) Both Conclusions I and II follow (D) Neither Conclusion I nor II follows
58. Rahul walks 15 meters to the north and then turns to the left and walks 8 meters. He then turns to the left again and walks 12 meters. After that, he turns to the left and walks 5 meters. He turns left once more and walks 7 meters, and finally, he turns to the left and walks 3 meters. In which direction is he facing now?
(A) East (B) West (C) North (D) South

59. Find the number of triangles in the given figure.



- (A) 20 (B) 24 (C) 28 (D) 32

60. If

'P ÷ Q' means 'Q is father of P'.

'P - Q' means 'Q is mother of P'.

'P + Q' means 'P is brother of Q'.

'P × Q' means 'P is sister of Q'.

Then which of the following means R is nephew of T?

- (A) $R + N - Q \times T$ (B) $R - Q - N \times T$
(C) $R + N \times Q \div T$ (D) $R + Q \times N - T$

61. Study the following arrangement carefully and answer the question given below:

W 1 R % 4 J E # 7 M 2 I 9 B H 3 A \$ 9 F Q 5 D G 6 U S P.

Three of the following look alike in a certain way on the basis of the above arrangement and hence form a group. Which one does not belong to the group?

- (A) 9 Q A (B) R W 4 (C) 3 B \$ (D) 5 F G

62. **Statement:** Should there be a complete ban on genetically modified imported seeds?

Arguments:

- I. Yes. This will boost the demand of domestically developed seeds.
II. No. This is the only way to increase production substantially.
III. Yes. Genetically modified products will adversely affect the health of those who consume these products.

- (A) Only I and II are strong (B) Only II is strong
(C) All the statements are strong (D) Only I and III are strong

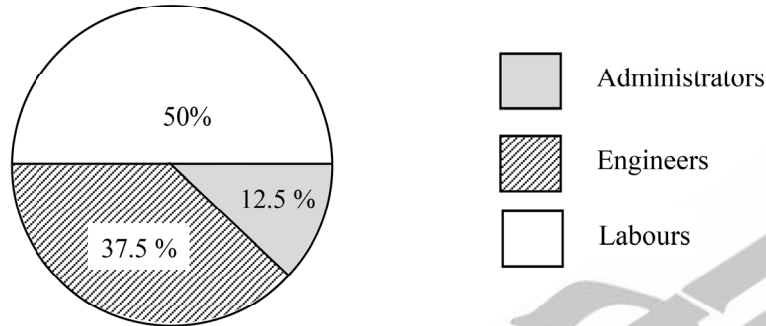
63. Priya is waiting for her turn at a reservation counter. What is her position from the front?

Statement I: There are a total of 80 people in the queue.

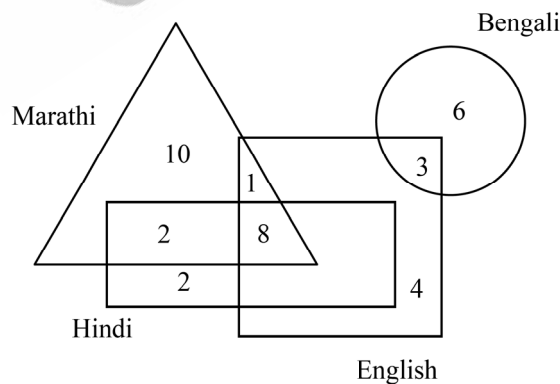
Statement II: Rajesh is standing at 65th position from the front. There are exactly 19 people between Rajesh and Priya.

- (A) Statement I alone is sufficient, but statement II is not sufficient
(B) Statement II alone is sufficient, but statement I is not sufficient
(C) Both the statements together are sufficient
(D) Both the statements together are not sufficient

64. Six people P, Q, R, S, T and U are sitting around a circular table facing the centre. Q sits second to the right of T. R sits to the immediate left of T. U sits second to the right of S. Who sits third to the right of P?
- (A) Q (B) R (C) S (D) T
65. The following chart shows the percentages of engineers, labours and administrators working in a particular company. If the total engineers working in the company are 150, then the number of labours are



- (A) 200 (B) 250 (C) 300 (D) 350
66. **Fact 1:** All dogs like to run.
Fact 2: Some dogs like to swim.
Fact 3: Some dogs look like their masters.
- If the first three statements are facts, which of the following statements must also be a fact?
- I: All dogs who like to swim look like their masters.
 II: Dogs who like to swim also like to run.
 III: Dogs who like to run do not look like their masters.
- A. I only B. II only C. II and III only D. I and III only
67. In the following figure, triangle represents persons who speak Marathi, square represents persons who speak English, rectangle represents persons who speak Hindi and circle represents persons who can speak Bengali. How many persons can speak Marathi, Hindi and English only?



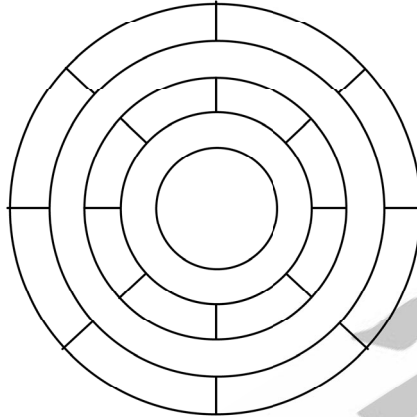
- (A) 2 (B) 4 (C) 8 (D) 7

68. In a certain code, 'STRENGTH' is written as 'TUSFOHUI'. How would 'POTENTIAL' be written in that same code?
 (A) OPUFOUIBM (B) OPSFMUIBM
 (C) QPUFOUJBM (D) QPSFMUIBM
69. If '+' means multiplication, '-' means division, '×' means subtraction and '÷' means addition, then the value of $15 + 6 \div 32 - 8 \times 12$ is
 (A) 80 (B) 82 (C) 88 (D) 92
70. Find the wrong number in the given sequence.
 1245, 2255, 3265, 4270, 5285
 (A) 2255 (B) 3265 (C) 4270 (D) 5285
71. Look at the series:
 E20, H18, _____, N14, Q12....
 What should come in the blank?
 (A) J16 (B) K16 (C) L16 (D) K15
72. 1st January 2024 was on Monday. On which day was the Independence day in the same year?
 (A) Monday (B) Wednesday
 (C) Thursday (D) Saturday
73. Which number will come in the place of question mark?
- | | | |
|----|----|----|
| 3 | 6 | 5 |
| 20 | 44 | 42 |
| 6 | ? | 8 |
- (A) 5 (B) 6 (C) 7 (D) 8
74. Five friends, Praneet, Jayesh, Girish, Aadesh and Tara, like five different subjects namely English, Maths, Computer, Hindi and Science, but not necessarily in the same order. Each of the friends also like one sport, namely Cricket, Football, Hockey, Badminton and Basketball, such that no two has the same favourite sport.
- Tara likes Science but does not like Hockey.
 - Aadesh likes Badminton but does not like Computer or English.
 - Girish likes Hockey but does not like English or Maths.
 - Praneet likes Cricket.
 - Tara likes Football.
 - The one who likes Hindi also likes Basketball.
- Who likes Hindi?
 (A) Praneet (B) Jayesh (C) Aadesh (D) Tara

75. Lawyer : Justice : : Arbitrator : _____

- (A) Injustice (B) Judgement
(C) Communication (D) Settlement

76. The minimum number of colours required to fill the spaces in the given diagram without any two adjacent spaces having the same colour is



- (A) 3 (B) 4 (C) 5 (D) 6

77. Study the following statement and arguments and decide which argument(s) is/are strong.

Statement: Examinations nowadays have shifted from subjective to objective system due to which there is an increased cutoff for selection.

Arguments:

- I. Subjective questions are mistake-prone as in writing mistakes tend to occur therefore it reduces the cutoff.
II. Objective questions have added the dimension of negative marking which reduces the marks and cut-throat competition.
III. There must be no subjective test now as they are very lengthy and time consuming.

- (A) Only I and II are strong (B) Only II and III are strong
(C) All I, II and III are strong (D) None of the arguments are strong

78. **Statement:** Due to increasing pollution, the government has announced a ban on the use of all single-use plastic products from the coming year.

Courses of Action:

- I. The government should introduce awareness campaign through newspaper, TV, social media etc to encourage people to use eco-friendly products.
II. The government should give subsidies to companies that manufacture eco-friendly products.

- (A) Only I follows (B) Only II follows
(C) Both I and II follows (D) Neither I nor II follows

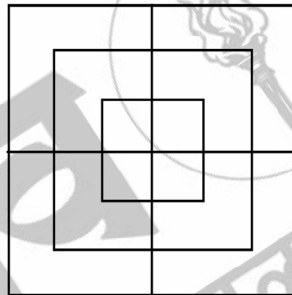
79. Which of the following is different from the others?
 (A) Triangle (B) Square (C) Cone (D) Circle

80. The following table gives the area (in square km) and population (in lakhs) of four cities.

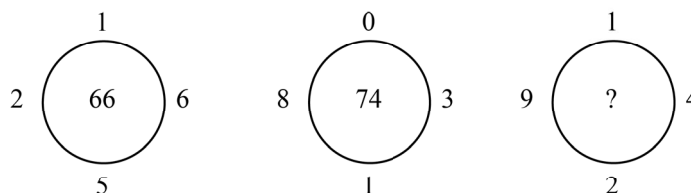
City	P	Q	R	S
Area	150	160	200	180
Population	30	40	60	50

The most densely populated city is

- (A) P (B) Q (C) R (D) S
81. If MUMBAI: VNNCJB :: JAIPUR : _____
 (A) BKQJSV (B) BKJQSV (C) KBQJVS (D) KBJQVS
82. The next term in the series BOA, DNC, FMF, HLH, is
 (A) JKG (B) KJK (C) JKK (D) IGK
83. Count the number of squares in the given figure.



- (A) 10 (B) 12 (C) 14 (D) 15
84. **In a certain language,**
 'How are you' is coded as 'tr we me',
 'You are fine' is coded as 'me tr gu',
 'I am fine' is coded as 'od gu ka',
 Which of the following can be the code for 'How fine am I'?
- (A) tr od ka gu (B) ka od we mw (C) we od gu ka (D) gu we me tr
85. Which number will come in the place of question mark?



- (A) 80 (B) 88 (C) 102 (D) 104

86. Consider the following statements:

- A: Some rats are cats
- B: Some cats are eagles
- C: All eagles are cats
- D: Some foxes are cats
- E: All foxes are eagles
- F: Some eagles are not foxes.

Choose the option which indicates valid argument containing logically related statements, that is, where the third is the conclusion drawn from the preceding two statements.

- (A) ABC (B) ADE (C) BED (D) EDB

87. What is the acute angle between the hour hand and the minute hand of the clock at 2:13 pm?

- (A) 11.5° (B) 13.5° (C) 18° (D) 16.5°

88. **Statement:** The headline of a newspaper regarding the newly built bridge that connects western suburb to the eastern suburb read “The bridge was built at the cost of ₹190 crores and even civil bus service is not utilizing it, what a pity to see it grossly underutilized.”

Assumptions:

- I. The building of such bridges does not serve any public objective.
 - II. There has to be some accountability and utility of money spent on public projects.
- (A) Only assumption I is implicit (B) Only assumption II is implicit
(C) Both I and II are implicit (D) Neither I nor II is implicit

English

Directions: Read the passage carefully and answer the following questions. (Qs 89 - 94)

The Indian government launched a new scheme named, ‘Khelo India’ by combining some old schemes and some new objectives. The scheme was launched with the objective of creating a larger popular platform and to establish excellence in sports. The scheme has 12 basic aspects. Two major aspects among them are to create interest about sports among students from early days in school and to increase girls’ participation in sports.

The ‘National Sports Development Fund’ was established for the development of sports. A donation to this fund is eligible for 100% exemption from income tax. The ‘Rajiv Gandhi Khelratna’ award was announced with an intention of encouraging players. This award consists of Rs.7,50,000, for excellent performance in the previous year of announcement of the award. It was given to the captain of Indian cricket team, Virat Kohli and Saikhom Mirabai Chanu for weightlifting in 2018. Apart from this, there are other awards like ‘Arjun Award’, ‘Dhyanchand Lifetime Achievement Award’, ‘Dronacharya Award’, ‘Maulana

Abul Kalam Azad Trophy’ and ‘National Sports Encouragement Award’. The sportspersons, who win gold medal in Olympic games are awarded Rs.75,00,000 each. The teams and sportsperson, who win gold, silver and bronze medals in various competitions such as Para Olympic, Asiad, Commonwealth, World Cup, Asian Championship, International University Tournaments, International tournaments for the disabled, Cricket tournaments for visually impaired, etc., are given good amount of rewards and jobs.

Besides, there is provision of pension for the retired sportspersons. Since 2018, a winner of the Olympics is granted a pension of Rs.20,000 per month and a winner of the Asian games is granted Rs.12,000 per month. Thus, the Government of India is opening many avenues for making the youth aware of sports as life career. Students can avail of many opportunities in this field.

89. According to the passage, what is the objective of Khelo India?
- | | |
|--|--|
| i. For rewarding retired sportspersons | ii. To create a larger platform for sports |
| iii. To award Olympic players | iv. To establish excellence in sports |

Choose the CORRECT answer from the options given below:

- (A) i. and ii. (B) ii. only (C) ii and iv. (D) iv. only

90. Why was the ‘National Sports Development Fund’ established?
- (A) For the overall development of sports
 (B) For sponsoring the travel expenses of national and international sports players
 (C) For funding inter-state sports
 (D) For starting professional sports curriculum in school

91. From the given options, select the one which is correct according to the passage.
 Saikhom Mirabai Chanu got the Rajiv Gandhi Khelratna award for _____
- (A) cricket (B) boxing (C) weight lifting (D) hockey

92. What is the tax benefit for donating to the ‘National Sports Development Fund’?
- (A) 100% tax exemption on sports equipments (B) No education cess
 (C) 100% exemption of medical expenses (D) 100% tax exemption

93. Match List-I and List-II

	List-I		List-II
i.	A winner of the Olympics	a.	is granted a pension of Rs.12,000 per month
ii.	The sportspersons who win gold medal in Olympic games	b.	is given Rs.7,50,000
iii.	A winner of the Asian games	c.	are granted a pension of Rs.20,000 per month
iv.	Rajiv Gandhi Khelratna’ awardee	d.	are given Rs.75,00,000 each

Choose the CORRECT answer from the options given below:

- (A) i – a, ii – c, iii – b, iv – d (B) i – b, ii – a, iii – c, iv – d
(C) i – c, ii – d, iii – a, iv – b (D) i – a, ii – c, iii – d, iv – b

94. From the given options, select the one which is correct according to the passage.

What does the term 'exemption' not mean?

- (A) exclusion (B) exception (C) liable (D) omission

95. Choose the correct meaning of the proverb/idiom.

To cry for the moon

- (A) To be a very sensitive person (B) To ask for something that is impossible
(C) To pester to be taken to the moon (D) To state the obvious

96. Choose the correct meaning of the proverb/idiom.

It takes two to tango

- (A) When two people are expected to know how to dance
(B) When two people are equally responsible in a wrong-doing
(C) To be talented enough to be able to recognise another's talents
(D) To match someone's skillset

97. From the given options select the one which is similar in meaning to the given word.

FORAY

- (A) Attack (B) Ranger (C) Intuition (D) Connect

98. From the given options select the one which is opposite in meaning to the given word.

ACCORD

- (A) Agreement (B) Respect (C) Contrast (D) Accredit

99. In the question given below, out of the four alternatives choose the one which can be substituted for the underlined word(s) in the given statement.

In order to avoid the virus from spreading, he has been in isolation away from others.

- (A) Revelry (B) Annexation (C) Quarantine (D) Congregation

100. With respect to the sentence given below, out of the four alternatives, choose the one with closest meaning to the italicised word.

The student faced disciplinary action for his *transgression* of plagiarizing a classmate's work.

- (A) crime (B) persuasion (C) virtue (D) perfection

101. With respect to the sentence given below, out of the four alternatives, choose the one that is opposite in meaning to the italicised word.

He felt a sense of *pride* as he held his diploma in his hands, realizing the years of hard work had paid off.

- (A) ego (B) coolness (C) humility (D) mousy

102. Read the sentence and find out whether there is any grammatical error. The error, if any, will be in one part of the sentence.

The way in which they spoke to all of us are disrespectful.

- (A) The way in (B) which they spoke
(C) to all of us (D) are disrespectful

Directions: Read the passage carefully and answer the following questions. (Qs 103 - 108)

The State is usually described as 'society politically organized'. Society is an association of human beings, who live a collective life and form social relations to fulfil their needs of life. These may be physical, emotional, intellectual or spiritual. The presence of the societal institutions like family, clans, tribes, villages, religious institutions, educational institutions, work place associations etc. in a society is a fact, which cannot be denied. Society is the whole web of social relationship based on kinship, affinity, language affinity, religious affinity, common conscience of individuals and territorial affinity. Social relationships are governed by necessity, custom, courtesy, morality, mutual understanding, agreement or even contract. When a society is governed by common set of laws, rules, regulations, and obey a supreme authority, it qualifies for being a State. The State fulfils the need of political organization of society to realize the purpose of collective living. This is what we understand from the famous phrases used by Aristotle (384-322 BCE) in his treatise Politics, where he observed that 'Man is a social animal; Man is a political animal'. Thus, the State is formed out of society. The society is the primary association. A State is formed to regulate the political activity of individuals for social order. The State depends on society for its existence, and not vice versa. R.M. MacIver (1882-1970) in his famous work 'The Modern State' has thus observed, 'There are social forms like the family or church or the club, which owe neither their origin nor their inspiration to the state; and social forces, like custom or competition, which the state may protect or modify, but certainly does not create; and social motives like friendship or jealousy, which establishes relationships too intimate and personal to be controlled by the great engine of the state. The State in a word regulates the outstanding external relationships of men in society'.

103. From the given options, select the one which correct according to the passage.

The term "affinity" means:

- (A) profanity (B) affluence (C) similarity (D) affirmation

104. As per the passage, what a State cannot create?

- (A) infrastructure (B) political organization
(C) regulations (D) personal relationships

105. According to the passage, what is the purpose of forming a State?

- (A) To create interpersonal relations (B) Fulfill religious customs of the society
(C) Fulfill political organization of society (D) To create social forms like religious institutions

106. From the given options, select the one which is correct according to the passage.

State is formed out of _____

- (A) social relationships (B) society
(C) government funds (D) religious institutions

107. From the given options select the one which is true according to the passage.

What example can be used to explain the term 'societal institutions'?

- i. family ii. religious institutions
iii. villages iv. work place associations

Choose the CORRECT answer from the options given below:

- (A) i. only (B) ii. and iii. (C) iv. only (D) All of the above

108. Match List-I and List-II

	List-I		List-II
i.	The State	a.	is the whole web of social relationships
ii.	Social relationship	b.	is a social animal
iii.	Society	c.	depends on society for its existence, and not vice versa
iv.	Man	d.	is governed by necessity, custom, courtesy, morality, mutual understanding, agreement or even contract

Choose the CORRECT answer from the options given below:

- (A) i – c, ii – d, iii – a, iv – b (B) i – b, ii – c, iii – a, iv – d
(C) i – b, ii – c, iii – d, iv – a (D) i – d, ii – c, iii – a, iv – b

109. In the question below, Spot the error and its correction in the given sentence.

The audience treat the speaker with the respect that he deserves.

- (A) deserves - deserving (B) that – since
(C) with – beside (D) treat – treats

110. In the question given below, parts of the sentence have been jumbled up. Rearrange the parts to produce the sentence and choose the correct order.

- P. and the European countries
Q. began to compete with each other
R. increased to a great extent
S. the trade and commerce

- (A) PQRS (B) RQPS (C) SRPQ (D) SQRP

111. Choose the correct spelling.

- (A) inefficable (B) eniffiable (C) iniffiable (D) ineffable

112. Choose the correct alternative to fill in the appropriate word(s) in the given statement in the following question:

The programmers, who discovered the bug, _____ rewarded.

- (A) was (B) were (C) will (D) is

Basic Mathematics

113. A number when divided by 8, leaves a remainder 2. What will be the remainder if the cube of the same number is divided by 8?
(A) 0 (B) 2 (C) 4 (D) 6
114. A man covers half part of a certain distance at 25 km/hr. He covers 40 percent of the remaining distance at the speed of 8 km/hr and covers rest of the distance at the speed of 18 km/hr. What is his average speed for the entire journey?
(A) $\frac{600}{37}$ km/hr (B) $\frac{650}{37}$ km/hr (C) $\frac{540}{37}$ km/hr (D) $\frac{400}{37}$ km/hr
115. A person was appointed for a 50 days job on a condition that he will be paid ₹ 24 for every working day but he will be fined ₹ 12 for every day he remains absent. After completion of the work he got ₹ 840. For how many days, he did not work?
(A) 5 (B) 10 (C) 12 (D) 15
116. If a carton containing a dozen mirrors is dropped, which of the following cannot be the ratio of broken mirrors to unbroken mirrors?
(A) 2 : 1 (B) 3 : 1 (C) 3 : 2 (D) 5 : 7
117. How many integers between 299 and 501 are divisible by 4 or 10?
(A) 60 (B) 61 (C) 62 (D) 63
118. Find the simple interest on ₹ 2000 at $\frac{25}{4}$ % per annum for the period from 7th February to 20th April 2025.
(A) ₹ 25 (B) ₹ 30 (C) ₹ 35 (D) ₹ 40
119. What will be the highest value of X in the following equation?
 $4X1 + 6Y7 + 3Z3 = 1371$
(A) 0 (B) 3 (C) 6 (D) 9
120. Two pipes A and B can fill a tank in 12 hours and 20 hours respectively. If the pipes are opened simultaneously, it is found that due to leakage in the bottom, 30 minutes extra are taken for the tank to be filled up. If the tank is full, in what time would the leak empty it?
(A) 100 hours (B) 125 hours (C) 120 hours (D) 130 hours

